
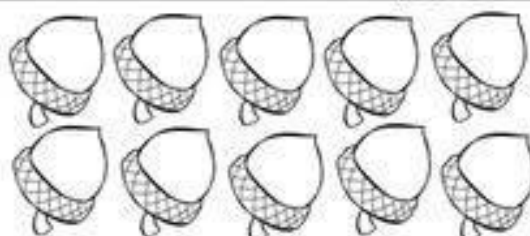


Atlikite veiksmus ir nuspalvinkite




$$7 - 2 = \underline{\quad}$$




$$10 - 3 = \underline{\quad}$$




$$8 - 4 = \underline{\quad}$$



$$5 - 2 = \underline{\quad}$$



$$10 - 2 = \underline{\quad}$$



$$9 - 3 = \underline{\quad}$$



$$6 - 4 = \underline{\quad}$$



$$8 - 3 = \underline{\quad}$$