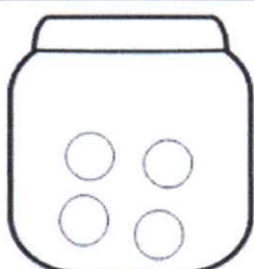


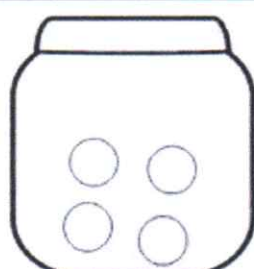
Kiek stikliniame inde yra saldainių?
Atlik veiksmus ir sužinok, kiek saldainių yra
stikliniuose induose.



$3 - 1 = \square$



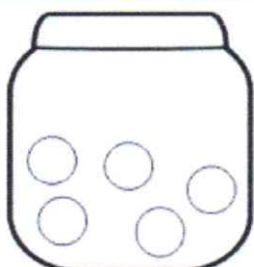
$4 - 2 = \square$



$4 - 3 = \square$



$6 - 4 = \square$



$5 - 2 = \square$



$7 - 3 = \square$



$7 - 6 = \square$



$8 - 5 = \square$

